

Balancing Equations

Name

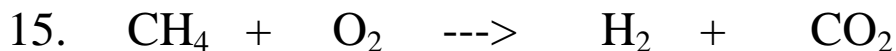
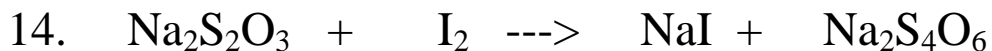
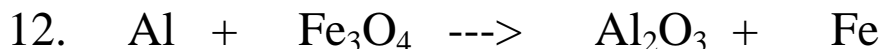
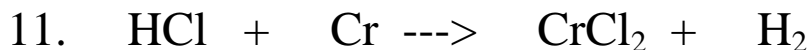

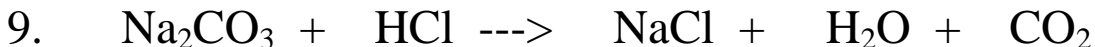
Date

Per.

List how many of each element is in each formula:



For each unbalanced equation below, fill in the coefficients that make the equation balanced.



More Practice Balancing Equations

